

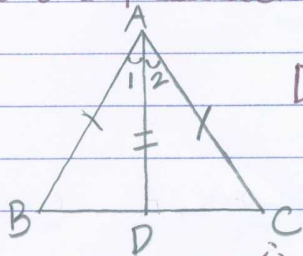
30
32

Zhu, Mei
MEDU 2010

HW#2: 0.3: 1,2,3, 0.6: 1,2,3, 0.8: 1,2

0.3.1 Isosceles Triangle Theorem

4
4



Draw the angle bisector AD.

Then, $m(\angle 1) = m(\angle 2)$

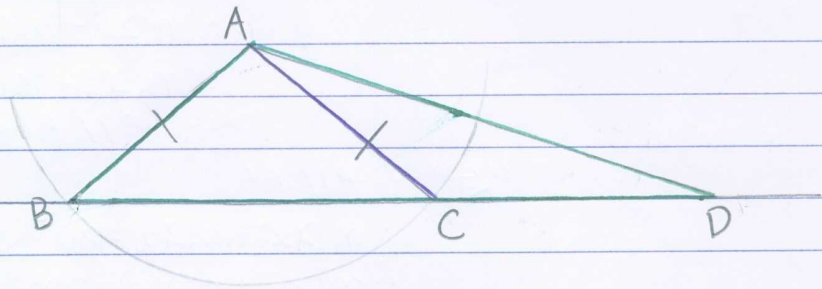
$\overline{AB} \cong \overline{AC}$ (given), $\overline{AD} \cong \overline{AD}$ (reflexive property)

In $\triangle ABD$ and $\triangle ACD$, $\triangle ABD \cong \triangle ACD$ (SAS)

$\therefore m(\angle B) = m(\angle C)$, or $\angle ABC \cong \angle ACB$

0.3.2

4
4



$\triangle ABC$ is an isosceles triangle that $\overline{AB} \cong \overline{AC}$.

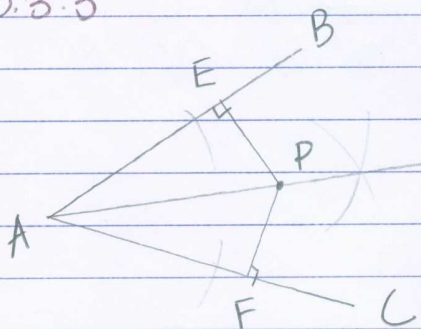
$\overline{AD} \cong \overline{AD}$ (reflexive property), $\angle D \cong \angle D$ (reflexive property)

For $\triangle ABD$ and $\triangle ACD$, we have SSA condition.

But, they are not congruent.

0.3.3

4
4



" \Rightarrow " \because Point P is in the interior of $\angle BAC$

$\therefore m(\angle BAP) + m(\angle CAP) = m(\angle BAC)$

$\therefore \overline{AP}$ bisects $\angle BAC$

$\therefore m(\angle BAP) = m(\angle CAP)$

$\therefore PE \perp AB, PF \perp AC$

$\therefore m(\angle PEA) = m(\angle PFA) = 90^\circ$

$\overline{AP} \cong \overline{AP}$ (reflexive property)

$\therefore \triangle PAE \cong \triangle PAF$ (AAS)

$\therefore \overline{PE} \cong \overline{PF}$

" \Leftarrow " \because P is in the interior of $\angle BAC$ and the distance from P to \overrightarrow{AB} equals the distance from P to \overrightarrow{AC}

$\therefore \overline{PE} \cong \overline{PF}, PE \perp AB, PF \perp AC$

Then, $\triangle APE$ and $\triangle APF$ are right triangles.

$\overline{AP} \cong \overline{AP}$ (reflexive property)

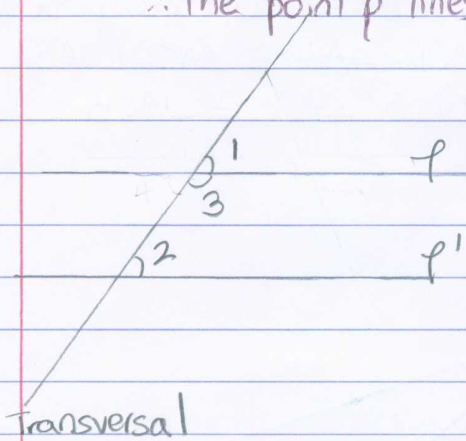
$\therefore \triangle APE \cong \triangle APF$ (HL)

$\therefore m(\angle EAP) \cong m(\angle FAP)$

\therefore The point P lies on the bisector of $\angle BAC$.

0.6.1

3
4



" \Rightarrow " \because Two corresponding angles are congruent and cut by the transversal

$\therefore m(\angle 1) = m(\angle 2)$

$\because \angle 1$ and $\angle 3$ are supplementary

$\therefore m(\angle 1) + m(\angle 3) = 180^\circ$

$\therefore m(\angle 2) + m(\angle 3) = 180^\circ$

$\therefore l \parallel l' \leftarrow$ what have you used to conclude this?

" \Leftarrow " $\because l \parallel l'$

$\therefore m(\angle 2) + m(\angle 3) = 180^\circ \leftarrow$ and this?

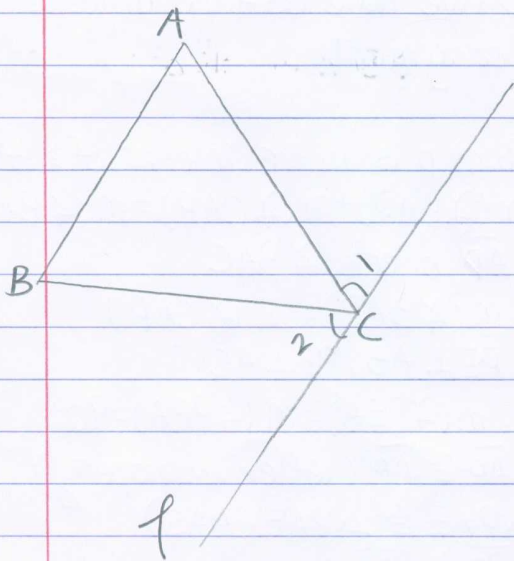
$\because m(\angle 1) + m(\angle 3) = 180^\circ$ (supplementary angles)

$\therefore m(\angle 2) = m(\angle 1)$

\therefore Two corresponding angles are congruent.

0.6.2

4
4



$\therefore l \parallel AB$

$\therefore m(\angle A) = m(\angle 1), m(\angle B) = m(\angle 2)$

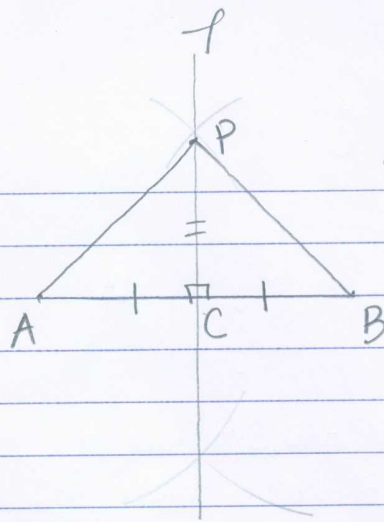
$\therefore m(\angle 1) + m(\angle 2) + m(\angle C) = 180^\circ$ (linear)

$\therefore m(\angle A) + m(\angle B) + m(\angle C) = 180^\circ$

by alt. int. angles thm.

good, except your notation convention might be misleading - at first I thought $\angle C$ meant something other than the interior angle of the triangle at the vertex C.

0.6.3



" \Rightarrow "

$\therefore P$ lies on the perpendicular bisector of \overline{AB}

$\therefore \overline{AC} \cong \overline{BC}, PC \perp AB$ ✓

$\therefore m(\angle PCA) = m(\angle PCB) = 90^\circ$ ✓

$\overline{PC} \cong \overline{PC}$ (reflexive property) ✓

$\therefore \triangle PCA \cong \triangle PCB$ (SAS) ✓

$\therefore \overline{PA} \cong \overline{PB}$ ✓

4
3
4

" \Leftarrow " $\therefore PA = PB$

$\therefore m(\angle A) = m(\angle B)$ (by exercise 0.3.1)

Assume \overline{PC} is the altitude of $\triangle PAB$, then \leftarrow do you just mean - drop the perpendicular from P to \overline{AB} ?

$m(\angle PCA) = m(\angle PCB)$

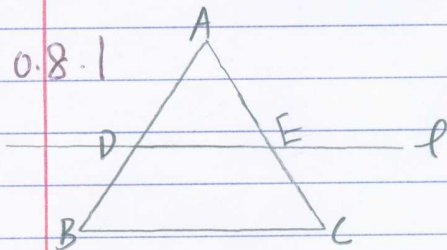
$\therefore \overline{PC} \cong \overline{PC}$

$\therefore \triangle PCA \cong \triangle PCB$ (HL)

$\therefore \overline{AC} \cong \overline{BC}$

$\therefore \overline{PC}$ bisects \overline{AB} , then \overline{PC} is the perpendicular bisector

0.8.1



" \Rightarrow " $\overleftrightarrow{DE} \parallel \overleftrightarrow{BC}$

$\therefore m(\angle ADE) = m(\angle ABC), m(\angle AED) = m(\angle ACB)$

$\therefore \triangle ADE \sim \triangle ABC$ (AA) OK

$\therefore \frac{AD}{AB} = \frac{AE}{AC}$

by what theorem?

3
4

such that $l \parallel \overleftrightarrow{BC}$.

" \Leftarrow " Assume that point D is on \overline{AB} and l passes through D . From Pasch's axiom, we know that line l also intersects \overline{AC} or \overline{BC} .

$\therefore l \parallel \overleftrightarrow{BC}$

$\therefore l$ intersects \overline{AC} but not \overline{BC} at point E'

$\therefore l \parallel \overleftrightarrow{BC}$

$\therefore \triangle ADE' \sim \triangle ABC$ and $\frac{AD}{AB} = \frac{AE'}{AC}, \overleftrightarrow{DE'} \parallel \overleftrightarrow{BC}$

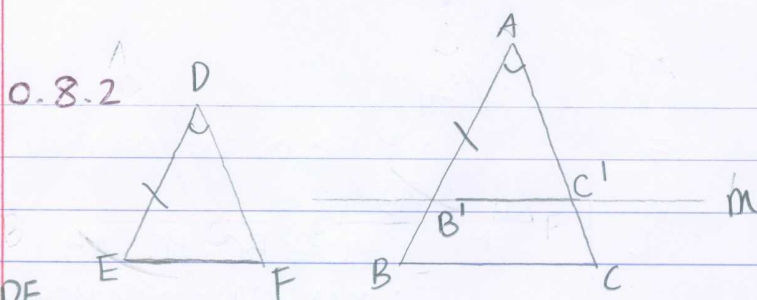
$\therefore \frac{AD}{AB} = \frac{AE}{AC}$

show more steps here

$\therefore E' = E$ then $\overleftrightarrow{DE} \parallel \overleftrightarrow{BC}$

so $l = \overleftrightarrow{DE}$ and...

4
4



Assume $AB \geq DE$

Let B' be the point between A and B such that $AB' = DE$.

Let m be the line through B' that is parallel \overleftrightarrow{BC} .

From Pasch's Axiom, line m also intersects \overleftrightarrow{AC} or \overleftrightarrow{BC} .

\therefore line $m \parallel \overleftrightarrow{BC}$

\therefore line m intersects \overleftrightarrow{BC} at some point C' but not \overleftrightarrow{AC}

\therefore line $m \parallel \overleftrightarrow{BC}$

$\therefore \triangle AB'C' \sim \triangle ABC$

$\therefore \frac{AB}{AC} = \frac{AB'}{AC'}$

$\therefore AB' = DE$

$\therefore \frac{AB}{AC} = \frac{DE}{AC'}$

$\therefore \overleftrightarrow{B'C'} \parallel \overleftrightarrow{BC}, DE = AB'$

$\therefore DF = AC'$

$\therefore m(\angle EDF) = m(\angle BAC)$

$\therefore \triangle DEF \cong \triangle AB'C'$ (SAS)

$\therefore \triangle AB'C' \sim \triangle ABC$

$\therefore \triangle DEF \sim \triangle ABC$