

Graphs of trigonometric functions

Lesson #18

MAT 1375 Precalculus

New York City College of Technology CUNY

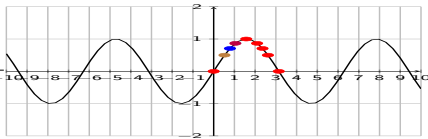


Graphs of sin, cos, and tan

• Graph the function $y = \sin(x)$

domain $D = \mathbb{R}$ range $R = [-1, 1]$

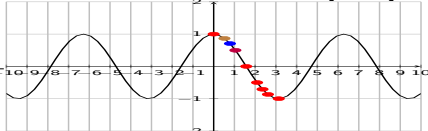
x	0°	30°	45°	60°	90°	120°	135°	150°	180°
	0	$\frac{\pi}{6}$	$\frac{\pi}{4}$	$\frac{\pi}{3}$	$\frac{\pi}{2}$	$\frac{2\pi}{3}$	$\frac{3\pi}{4}$	$\frac{5\pi}{6}$	π
y	0	$\frac{1}{2}$	$\frac{\sqrt{2}}{2}$	$\frac{\sqrt{3}}{2}$	1	$\frac{\sqrt{3}}{2}$	$\frac{\sqrt{2}}{2}$	$\frac{1}{2}$	0
≈	0	.5	.707	.866	1	.866	.707	.5	0



• Graph the function $y = \cos(x)$

domain $D = \mathbb{R}$ range $R = [-1, 1]$

x	0°	30°	45°	60°	90°	120°	135°	150°	180°
	0	$\frac{\pi}{6}$	$\frac{\pi}{4}$	$\frac{\pi}{3}$	$\frac{\pi}{2}$	$\frac{2\pi}{3}$	$\frac{3\pi}{4}$	$\frac{5\pi}{6}$	π
y	1	$\frac{\sqrt{3}}{2}$	$\frac{\sqrt{2}}{2}$	$\frac{1}{2}$	0	$-\frac{1}{2}$	$-\frac{\sqrt{2}}{2}$	$-\frac{\sqrt{3}}{2}$	-1
≈	1	.866	.707	.5	0	-.5	-.707	-.866	-1



• Graph the function $y = \tan(x)$

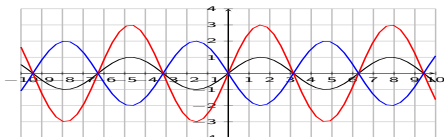
domain $D = \mathbb{R} - \{\frac{\pi}{2} + k\pi \mid k \in \mathbb{Z}\}$ range $R = \mathbb{R}$

x	0°	30°	45°	60°	90°	120°	135°	150°	180°
	0	$\frac{\pi}{6}$	$\frac{\pi}{4}$	$\frac{\pi}{3}$	$\frac{\pi}{2}$	$\frac{2\pi}{3}$	$\frac{3\pi}{4}$	$\frac{5\pi}{6}$	π
y	0	$\frac{\sqrt{3}}{3}$	1	$\sqrt{3}$	undef	$-\sqrt{3}$	-1	$-\frac{\sqrt{3}}{3}$	0
≈	0	.577	1	1.73		-1.73	-1	-.577	0

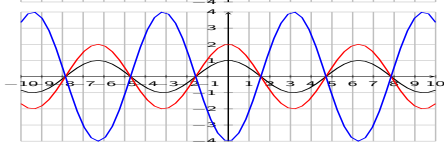


Amplitude, period, and phase shift for sin, cos

• Amplitude A

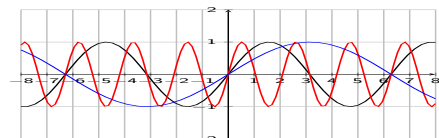


$$\begin{array}{ll} y = \sin(x) & A = 1 \\ y = 3 \sin(x) & A = 3 \\ y = -2 \sin(x) & A = 2 \end{array}$$

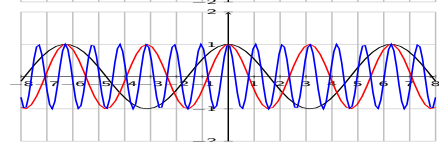


$$\begin{array}{ll} y = \cos(x) & A = 1 \\ y = 2 \cos(x) & A = 2 \\ y = -4 \cos(x) & A = 4 \end{array}$$

• Period P



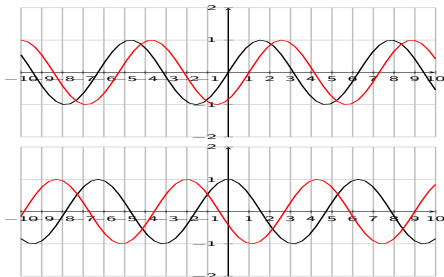
$$\begin{array}{ll} y = \sin(x) & P = 2\pi \\ y = \sin(3x) & P = \frac{2\pi}{3} \\ y = \sin\left(\frac{1}{2}x\right) & P = \frac{2\pi}{\frac{1}{2}} = 2\pi \cdot \frac{2}{1} \\ & = 4\pi \end{array}$$



$$\begin{array}{ll} y = \cos(x) & P = 2\pi \\ y = \cos(2x) & P = \frac{2\pi}{2} = \pi \\ y = \cos(6x) & P = \frac{2\pi}{6} = \frac{\pi}{3} \end{array}$$

Amplitude, period, and phase shift for sin, cos

• Phase shift S



$$y = \sin(x) \quad S = 0$$

$$y = \sin(x - 1) \quad S = 1$$

$$y = \cos(x) \quad S = 0$$

$$y = \cos(x + 2) \quad S = -2$$

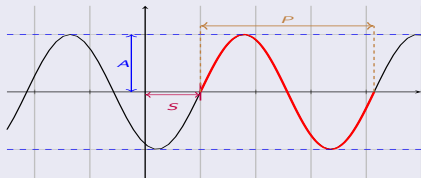
Amplitude, period, phase shift

When $y = a \cdot \sin(bx + c)$ or $y = a \cdot \cos(bx + c)$

Amplitude $A = |a|$

Period $P = \left| \frac{2\pi}{b} \right|$

Phase shift $S = \frac{-c}{b}$

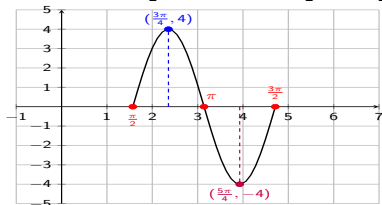


Graphing sin and cos - exercises

Find amplitude, period, and phase shift. Graph the function over one period. Label all maxima, minima, and roots.

① $y = 4 \sin(2x - \pi)$

$$A = 4, P = \frac{2\pi}{2} = \pi, S = \frac{-(-\pi)}{2} = \frac{\pi}{2}$$



Roots:

- $S = \frac{\pi}{2}$
- $S + P = \frac{\pi}{2} + \pi = \frac{3\pi}{2}$
- $(\frac{\pi}{2} + \frac{3\pi}{2}) \div 2 = \frac{4\pi}{2} \cdot \frac{1}{2} = \frac{4\pi}{4} = \pi$

Maximum:

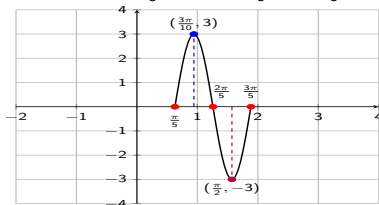
- $(\frac{\pi}{2} + \pi) \div 2 = \frac{3\pi}{2} \cdot \frac{1}{2} = \frac{3\pi}{4}$

Minimum:

- $(\pi + \frac{3\pi}{2}) \div 2 = \frac{5\pi}{2} \cdot \frac{1}{2} = \frac{5\pi}{4}$

② $y = 3 \sin(5x - \pi)$

$$A = 3, P = \frac{2\pi}{5}, S = \frac{-(-\pi)}{5} = \frac{\pi}{5}$$



Roots:

- $S = \frac{\pi}{5}$
- $S + P = \frac{\pi}{5} + \frac{2\pi}{5} = \frac{3\pi}{5}$
- $(\frac{\pi}{5} + \frac{3\pi}{5}) \div 2 = \frac{4\pi}{5} \cdot \frac{1}{2} = \frac{2\pi}{5}$

Maximum:

- $(\frac{\pi}{5} + \frac{2\pi}{5}) \div 2 = \frac{3\pi}{5} \cdot \frac{1}{2} = \frac{3\pi}{10}$

Minimum:

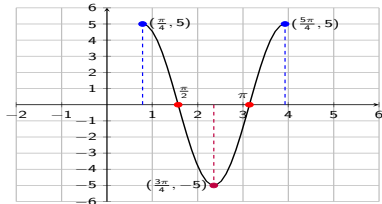
- $(\frac{2\pi}{5} + \frac{3\pi}{5}) \div 2 = \frac{5\pi}{5} \cdot \frac{1}{2} = \frac{\pi}{2}$

Graphing sin and cos - exercises

Find amplitude, period, and phase shift. Graph the function over one period. Label all maxima, minima, and roots.

8 $y = 5 \cos(2x - \frac{\pi}{2})$

$$A = 5, P = \frac{2\pi}{2} = \pi, S = \frac{-(-\frac{\pi}{2})}{2} = \frac{\pi}{4}$$



Maxima:

- $S = \frac{\pi}{4}$
- $S + P = \frac{\pi}{4} + \pi = \frac{5\pi}{4}$

Minimum:

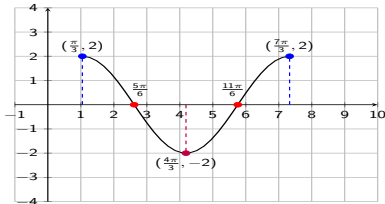
- $(\frac{\pi}{4} + \frac{5\pi}{4}) \div 2 = \frac{6\pi}{4} \cdot \frac{1}{2} = \frac{6\pi}{8} = \frac{3\pi}{4}$

Roots:

- $(\frac{\pi}{4} + \frac{3\pi}{4}) \div 2 = \frac{4\pi}{4} \cdot \frac{1}{2} = \frac{\pi}{2}$
- $(\frac{3\pi}{4} + \frac{5\pi}{4}) \div 2 = \frac{8\pi}{4} \cdot \frac{1}{2} = \frac{8\pi}{8} = \pi$

9 $y = 2 \cos(x - \frac{\pi}{3})$

$$A = 2, P = \frac{2\pi}{1} = 2\pi, S = \frac{-(-\frac{\pi}{3})}{1} = \frac{\pi}{3}$$



Maxima:

- $S = \frac{\pi}{3}$
- $S + P = \frac{\pi}{3} + 2\pi = \frac{7\pi}{3}$

Minimum:

- $(\frac{\pi}{3} + \frac{7\pi}{3}) \div 2 = \frac{8\pi}{3} \cdot \frac{1}{2} = \frac{8\pi}{6} = \frac{4\pi}{3}$

Roots:

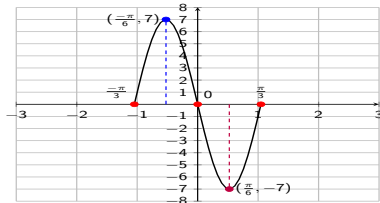
- $(\frac{\pi}{3} + \frac{4\pi}{3}) \div 2 = \frac{5\pi}{3} \cdot \frac{1}{2} = \frac{5\pi}{6}$
- $(\frac{4\pi}{3} + \frac{7\pi}{3}) \div 2 = \frac{11\pi}{3} \cdot \frac{1}{2} = \frac{11\pi}{6}$

Graphing sin and cos - exercises

Find amplitude, period, and phase shift. Graph the function over one period. Label all maxima, minima, and roots.

5 $y = 7 \sin(3x + \pi)$

$$A = 7, P = \frac{2\pi}{3}, S = -\frac{\pi}{3}$$



Roots:

- $S = -\frac{\pi}{3}$
- $S + P = -\frac{\pi}{3} + \frac{2\pi}{3} = \frac{\pi}{3}$
- $(-\frac{\pi}{3} + \frac{\pi}{3}) \div 2 = 0 \cdot \frac{1}{2} = 0$

Maximum:

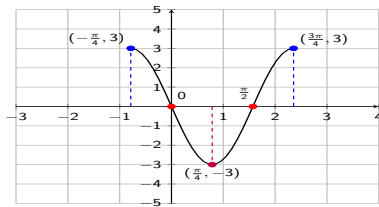
- $(-\frac{\pi}{3} + 0) \div 2 = -\frac{\pi}{3} \cdot \frac{1}{2} = -\frac{\pi}{6}$

Minimum:

- $(0 + \frac{\pi}{3}) \div 2 = \frac{\pi}{3} \cdot \frac{1}{2} = \frac{\pi}{6}$

6 $y = 3 \cos(2x + \frac{\pi}{2})$

$$A = 3, P = \frac{2\pi}{2} = \pi, S = -\frac{\pi}{2} = -\frac{\pi}{2} \cdot \frac{1}{2} = -\frac{\pi}{4}$$



Maxima:

- $S = -\frac{\pi}{4}$
- $S + P = -\frac{\pi}{4} + \pi = -\frac{\pi}{4} + \frac{4\pi}{4} = \frac{3\pi}{4}$

Minimum:

- $(-\frac{\pi}{4} + \frac{3\pi}{4}) \div 2 = \frac{2\pi}{4} \cdot \frac{1}{2} = \frac{\pi}{4}$

Roots:

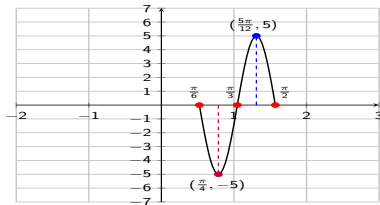
- $(-\frac{\pi}{4} + \frac{\pi}{4}) \div 2 = 0 \cdot \frac{1}{2} = 0$
- $(\frac{\pi}{4} + \frac{3\pi}{4}) \div 2 = \frac{4\pi}{4} \cdot \frac{1}{2} = \frac{\pi}{2}$

Graphing sin and cos - exercises

Find amplitude, period, and phase shift. Graph the function over one period. Label all maxima, minima, and roots.

7 $y = -5 \sin(6x - \pi)$

$$A = |-5| = 5, P = \frac{2\pi}{6} = \frac{\pi}{3}, S = \frac{-(-\pi)}{6} = \frac{\pi}{6}$$



Roots:

- $S = \frac{\pi}{6}$
- $S + P = \frac{\pi}{6} + \frac{\pi}{3} = \frac{\pi}{6} + \frac{2\pi}{6} = \frac{3\pi}{6} = \frac{\pi}{2}$
- $(\frac{\pi}{6} + \frac{\pi}{2}) \div 2 = \frac{4\pi}{6} \cdot \frac{1}{2} = \frac{4\pi}{12} = \frac{\pi}{3}$

Minimum:

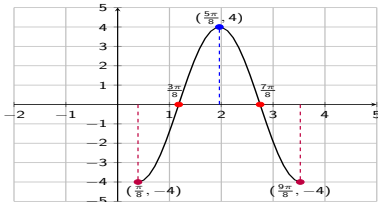
- $(\frac{\pi}{6} + \frac{\pi}{3}) \div 2 = \frac{3\pi}{6} \cdot \frac{1}{2} = \frac{3\pi}{12} = \frac{\pi}{4}$

Maximum:

- $(\frac{\pi}{3} + \frac{\pi}{2}) \div 2 = \frac{5\pi}{6} \cdot \frac{1}{2} = \frac{5\pi}{12}$

8 $y = -4 \cos(2x - \frac{\pi}{4})$

$$A = |-4| = 4, P = \frac{2\pi}{2} = \pi, S = \frac{-(-\frac{\pi}{4})}{2} = \frac{\pi}{8}$$



Minima:

- $S = \frac{\pi}{8}$
- $S + P = \frac{\pi}{8} + \pi = \frac{9\pi}{8}$

Maximum:

- $(\frac{\pi}{8} + \frac{9\pi}{8}) \div 2 = \frac{10\pi}{8} \cdot \frac{1}{2} = \frac{10\pi}{16} = \frac{5\pi}{8}$

Roots:

- $(\frac{\pi}{8} + \frac{5\pi}{8}) \div 2 = \frac{6\pi}{8} \cdot \frac{1}{2} = \frac{3\pi}{8}$
- $(\frac{5\pi}{8} + \frac{9\pi}{8}) \div 2 = \frac{14\pi}{8} \cdot \frac{1}{2} = \frac{7\pi}{8}$

