

Name:

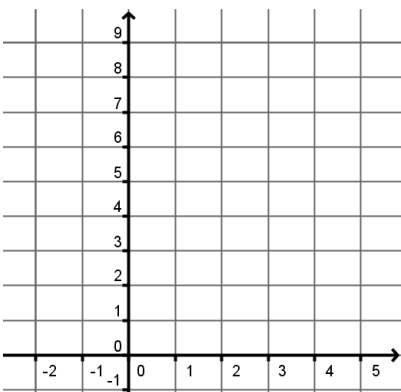
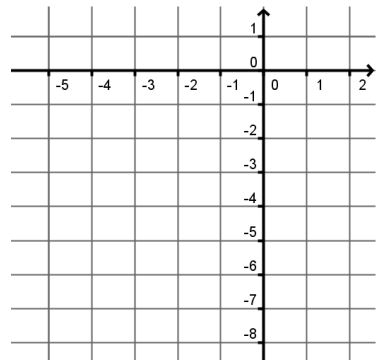
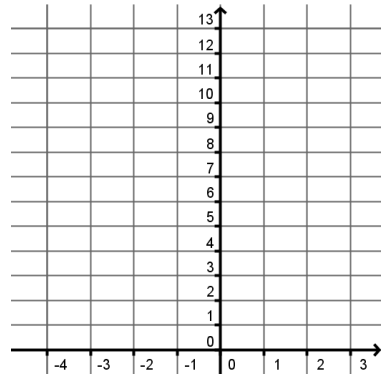
Date:

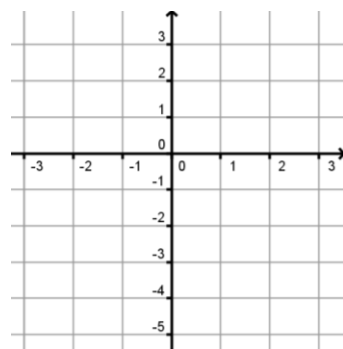
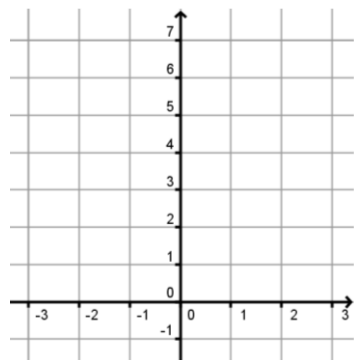
Period:

### Practice Worksheet: Graphing Quadratic Functions in Standard Form

- 1] For any quadratic of the form  $y = ax^2 + c$ , the axis of symmetry is always the line \_\_\_\_\_.
- 2] If the axis of symmetry of a quadratic is  $x = 2$  and  $(-1, 3)$  is on the graph, then the point (\_\_\_\_, \_\_\_\_ ) must also be on the graph.
- 3] For any quadratic of the form  $y = ax^2 + c$ , the y-intercept is always the same point as the \_\_\_\_\_.
- 4] The graph of  $y = 2x^2 + 4x + 3$  passes through the point  $(1, \text{_____})$  and  $(-1, \text{_____})$ .

**For #5-12, label the axis of symmetry, vertex, y-intercept, and at least three more points on the graph.**

<p>5] <math>y = x^2 - 4x + 8</math>  <math>a = \quad b = \quad c =</math>          Opens up or down?          Is vertex a max or min?          y-intercept:          Axis of Symmetry is <math>x = \text{_____}</math></p> <p>Vertex: (_____, _____)</p> 	<p>6] <math>y = 2x^2 + 8x</math>  <math>a = \quad b = \quad c =</math>          Opens up or down?          Is vertex a max or min?          y-intercept:          Axis of Symmetry is <math>x = \text{_____}</math></p> <p>Vertex: (_____, _____)</p> 	<p>7] <math>y = -3x^2 - 12x + 1</math>  <math>a = \quad b = \quad c =</math>          Opens up or down?          Is vertex a max or min?          y-intercept:          Axis of Symmetry is <math>x = \text{_____}</math></p> <p>Vertex: (_____, _____)</p> 
----------------------------------------------------------------------------------------------------------------------------------------------------------------------------------------------------------------------------------------------------------------------------------------------------------------------------------------------------------------	--------------------------------------------------------------------------------------------------------------------------------------------------------------------------------------------------------------------------------------------------------------------------------------------------------------------------------------------------------------	----------------------------------------------------------------------------------------------------------------------------------------------------------------------------------------------------------------------------------------------------------------------------------------------------------------------------------------------------------------------

<p>8] <math>y = -\frac{3}{2}x^2 + 3</math>  <math>a = \quad b = \quad c =</math>          Opens up or down?          Is vertex a max or min?          y-intercept:          Axis of Symmetry          is <math>x = \text{_____}</math></p> <p>Vertex: (_____, _____)</p> <p>Find the coordinates <math>(2, \text{_____})</math> and <math>(-2, \text{_____})</math> to guide the shape of the parabola.</p> 	<p>9] <math>y = 2x^2 - 1</math>  <math>a = \quad b = \quad c =</math>          Opens up or down?          Is vertex a max or min?          y-intercept:          Axis of Symmetry          is <math>x = \text{_____}</math></p> <p>Vertex: (_____, _____)</p> <p>Find the coordinates <math>(2, \text{_____})</math> and <math>(-2, \text{_____})</math> to guide the shape of the parabola.</p> 
-------------------------------------------------------------------------------------------------------------------------------------------------------------------------------------------------------------------------------------------------------------------------------------------------------------------------------------------------------------------------------------------------------------------------------------------------------------------------------------------------------------------------	----------------------------------------------------------------------------------------------------------------------------------------------------------------------------------------------------------------------------------------------------------------------------------------------------------------------------------------------------------------------------------------------------------------------------------------------------------------------------------------------------------------

10]  $y = 2x^2 + 4x + 3$

a =            b =            c =

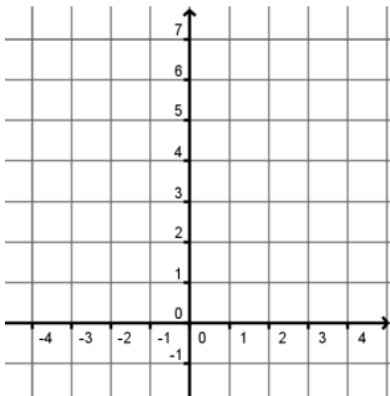
Opens up or down?

Is vertex a max or min?

y-intercept:

Axis of Symmetry is  $x =$  \_\_\_\_\_

Vertex: (\_\_\_\_\_, \_\_\_\_\_)



Read your graph to find the coordinates of the points:

(1, \_\_\_\_\_), (3, \_\_\_\_\_), and

(4, \_\_\_\_\_).

11]  $y = \frac{1}{3}x^2 + 2x - 1$

a =            b =            c =

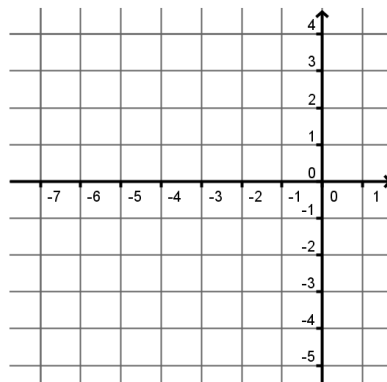
Opens up or down?

Is vertex a max or min?

y-intercept:

Axis of Symmetry is  $x =$  \_\_\_\_\_

Vertex: (\_\_\_\_\_, \_\_\_\_\_)



Read your graph to find the coordinates of the points:

(-6, \_\_\_\_\_), (-4, \_\_\_\_\_),

and (-2, \_\_\_\_\_).

12]  $y = -\frac{1}{2}x^2 - 2x - 2$

a =            b =            c =

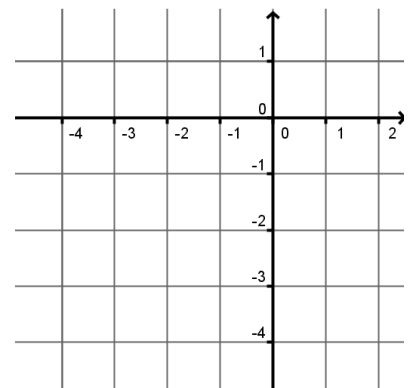
Opens up or down?

Is vertex a max or min?

y-intercept:

Axis of Symmetry is  $x =$  \_\_\_\_\_

Vertex: (\_\_\_\_\_, \_\_\_\_\_)



Read your graph to find the coordinates of the points:

(-4, \_\_\_\_\_), (-3, \_\_\_\_\_),

and (-1, \_\_\_\_\_).

13] A baker has modeled the monthly operating costs for making wedding cakes by the function  $y = \frac{1}{2}x^2 - 12x + 150$  where  $y$  is the total cost in dollars and  $x$  is the number of cakes prepared.

A] What is the minimum operating cost?

B] How many cakes should be prepared to yield the minimum operating cost?

14] The path that a motocross dirt bike rider follows during a jump is given by  $y = -0.4x^2 + 4x + 10$  where  $x$  is the horizontal distance (in feet) from the edge of the ramp and  $y$  is the height (in feet). What is the maximum height of the rider during the jump?